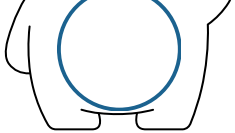



Name :

Class :



MISSING NUMBERS

Write the missing numbers in the blanks.

1 ▶ 2 ▶  ▶ 4 ▶ 5

10 ◀  ◀ 8 ◀ 7 ◀ 

 ▶ 12 ▶ 13 ▶  ▶ 15

20 ◀ 19 ◀  ◀ 17 ◀ 

 ▶ 22 ▶  ▶ 24 ▶ 

Name: _____

Number Sequence

Write the missing number.

1

4

7

10

Name: _____

Counting 1 to 20

Fill in the missing numbers.

1		3	4	
---	--	---	---	--

	7			10
--	---	--	--	----

11		13	14	
----	--	----	----	--

	17		19	20
--	----	--	----	----






DINOSAUR MISSING NUMBER

1		3		
	7		9	
			13	
		15		
			19	



MISSING NUMBERS

Fill each heart with the missing numbers from 1 to 20.





Name: _____

Class: _____

Numbers 1 - 10

Write the missing numbers.




Name:

Date:

Missing Numbers

Follow the track and fill in the numbers

				24	
		8			26
5					
		10		20	
					29
2					
1		13		17	
					32



Name: _____

What's missing?







Practice writing your numbers 1 - 100 by tracing the numbers in order below when you come to an empty box, write in the missing number.




1	2		4	5	6		8	9	10
11	12	13	14		16	17	18		20
21		23	24	25	26		28	29	30
	32	33	34	35	36	37		39	40
41	42	43			46	47	48	48	50
51	52	53	54	55		57	58	59	
61	62		64	65	66	67	68		70
	72	73	74	75	76		78	79	80
81		83	84	85	86	87		89	90
91	92		94	95	96	97	98		100

Missing Numbers

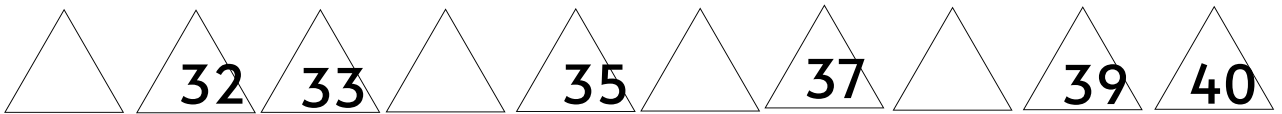
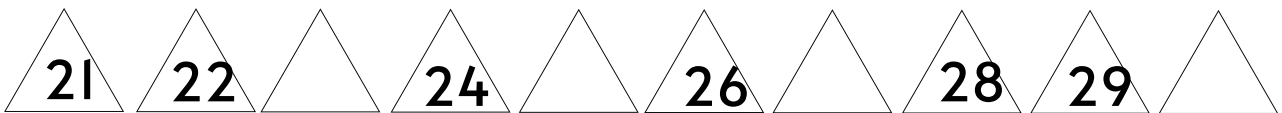
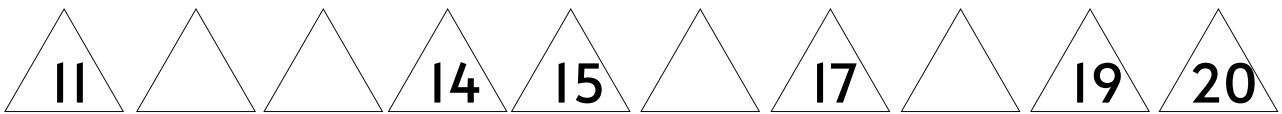
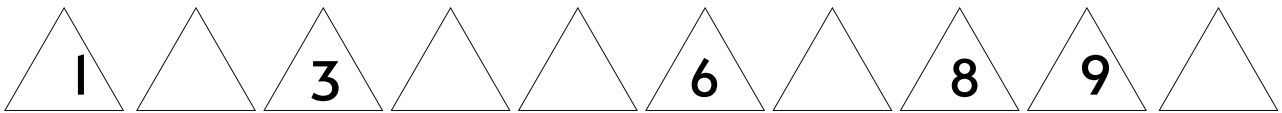
Find and write missing numbers





Let's Count 1 to 100

Write the missing numbers.



Name: _____

Counting 1 to 100

Fill in the missing numbers.

1	2	3	4		6	7	8	9	10
11	12	13	14	15	16	17		19	20
21		23	24	25		27	28	29	30
31	32	33		35	36	37	38	39	40
41	42	43	44		46	47	48		50
51		53	54	55	56	57	58	59	
61	62	63	64		66		68	69	70
	72	73		75	76	77	78		80
81	82		84	85		87		89	90
	92	93	94	95	96		98	99	

Name:

Count to 120

1	2	3	4	5	6	7	8	9	10
11	12	13	14	15	16	17	18	19	20
21	22	23	24	25	26	27	28	29	30
31	32	33	34	35	36	37	38	39	40
41	42	43	44	45	46	47	48	49	50
51	52	53	54	55	56	57	58	59	60
61	62	63	64	65	66	67	68	69	70
71	72	73	74	75	76	77	78	79	80
81	82	83	84	85	86	87	88	89	90
91	92	93	94	95	96	97	98	99	100
101	102	103	104	105	106	107	108	109	110
111	112	113	114	115	116	117	118	119	120

Name: _____

Count to 120

1	2	3	4		6	7	8	9	
11	12	13	14		16	17	18	19	
21	22	23	24		26	27	28	29	
31	32	33	34		36	37	38	39	
41	42	43	44		46	47	48	49	
51	52	53	54		56	57	58	59	
61	62	63	64		66	67	68	69	
71	72	73	74		76	77	78	79	
81	82	83	84		86	87	88	89	
91	92	93	94		96	97	98	99	
101	102	103	104		106	107	108	109	
111	112	113	114		116	117	118	119	

Name:

Count to 120

1		3		5		7		9	
11		13		15		17		19	
21		23		25		27		29	
31		33		35		37		39	
41		43		45		47		49	
51		53		55		57		59	
61		63		65		67		69	
71		73		75		77		79	
81		83		85		87		89	
91		93		95		97		99	
101		103		105		107		109	
111		113		115		117		119	

Name:

Count to 120

1	2	3	4	5	6	7	8	9	
11	12	13	14	15	16	17	18	19	
21	22	23	24	25	26	27	28	29	
31	32	33	34	35	36	37	38	39	
41	42	43	44	45	46	47	48	49	
51	52	53	54	55	56	57	58	59	
61	62	63	64	65	66	67	68	69	
71	72	73	74	75	76	77	78	79	
81	82	83	84	85	86	87	88	89	
91	92	93	94	95	96	97	98	99	
101	102	103	104	105	106	107	108	109	
111	112	113	114	115	116	117	118	119	

Name: _____

Count to 120

1		3	4		6	7	8	9	
11		13	14		16	17	18	19	
21		23	24		26	27	28	29	
31		33	34		36	37	38	39	
41		43	44		46	47	48	49	
51		53	54		56	57	58	59	
61		63	64		66	67	68	69	
71		73	74		76	77	78	79	
81		83	84		86	87	88	89	
91		93	94		96	97	98	99	
101		103	104		106	107	108	109	
111		113	114		116	117	118	119	

Name:

Count to 120

1	2	3	4	5	6		8	9	10
11		13	14	15	16	17	18	19	20
21	22	23		25	26	27	28	29	30
31	32	33	34	35	36	37	38		40
	42	43	44	45	46	47	48	49	50
51	52	53	54	55		57	58	59	60
61	62		64	65	66	67	68	69	70
71	72	73	74		76	77	78	79	80
81	82	83	84	85	86		88	89	90
91	92		94	95	96	97	98	99	100
101	102	103	104	105		107	108	109	110
111	112	113	114	115	116	117	118	119	

Name:


Count to 120

1	2	3	4		6	7		9	10
	12	13		15	16	17	18		20
21	22	23	24	25	26		28	29	
31		33		35	36	37		39	40
	42	43	44	45		47	48		50
51		53		55	56	57		59	60
61		63	64		66	67	68		
71	72		74	75	76		78	79	80
81		83		85	86	87	88	89	90
91	92	93	94	95			98	99	
	102	103		105	106		108		110
111		113	114		116	117	118	119	120

Name:

Count to 120

1	2	3	4	5	6	7	8	9	10
11	12	13	14	15	16	17	18	19	20
21	22	23	24	25	26	27	28	29	30
31	32	33	34	35	36	37	38	39	40
41	42	43	44	45	46	47	48	49	50
51	52	53	54	55	56	57	58	59	60
61	62	63	64	65	66	67	68	69	70
71	72	73	74	75	76	77	78	79	80
81	82	83	84	85	86	87	88	89	90
91	92	93	94	95	96	97	98	99	100
101	102	103	104	105	106	107	108	109	110
111	112	113	114	115	116	117	118	119	120



WINTER



Missing Numbers

Fill in the missing numbers.


1		3		5	6			9	
				15					
									30
						37			
	42								
			54						
							68		
81									
				95					100



NAME

DATE

DIRECTIONS: FILL IN THE MISSING NUMBERS IN EACH SET USING THE CUES PROVIDED.



1		3	4	
6		9		

2	4		8	10
		16	18	

1		5		9
	13	15		



2	5		11	
17		23		

	10			25
30			45	

Name: _____

Score: _____

Numbers 1 - 25

Fill in the missing numbers.



Which Number is *missing*?

Look carefully at the number chart and fill in the missing numbers.

1	2		4		6	7		9	10
		13	14			17		19	
21				25	26		28		30
	32		34				38		
41		43				47			50
		53			56			59	
			64	65			68		70
71		73				77		79	
	82			85	86				90
		93				97		99	
101	102			105					110
		113			116				120

Name _____

Date _____

Writing Numbers

Write the missing numbers.

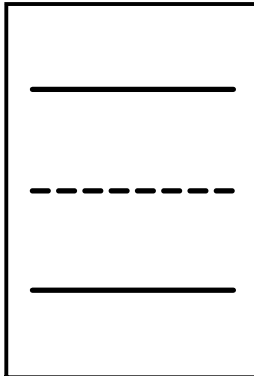
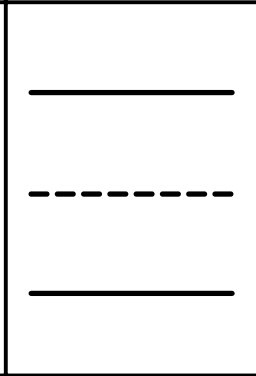
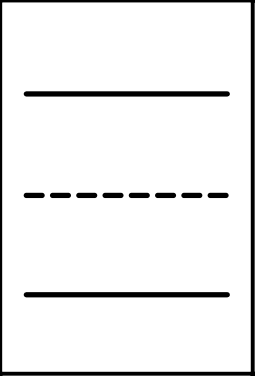
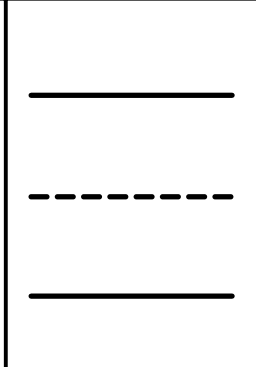
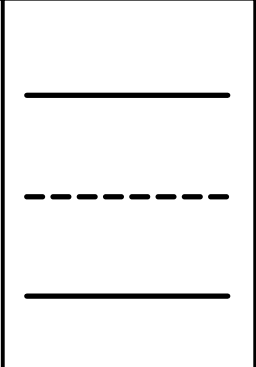
1	2		4	5
6	7	8	9	
11	12		14	15
16		18	19	

Name _____

Date _____

Writing Numbers

Write the missing numbers.

	2	3	4	5
6		8	9	10
11	12	13	14	
16		18		20

Name _____

Date _____

Writing Numbers

Write the missing numbers.

1	2	3	4	
6		8	9	10
11	12		14	
	17		19	

Name _____

Date _____

Writing Numbers

Write the missing numbers.

1		3	4	
	7	8		10
11	12		14	15
16		18	19	

Name _____

Date _____

Writing Numbers

Write the missing numbers.

	2		4	5
6	7	8		10
11		13	14	
16	17		19	

Name _____

Date _____

Writing Numbers

Write the missing numbers.

1	2		4	5
	7	8	9	
11		13	14	
	17	18		20

Name _____

Date _____

Writing Numbers

Write the missing numbers.

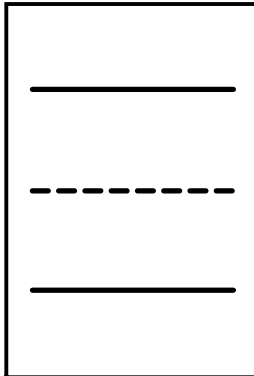

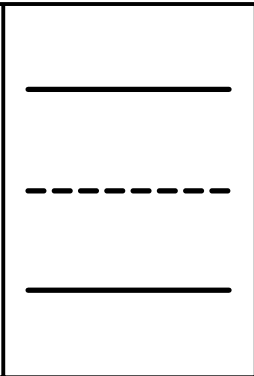
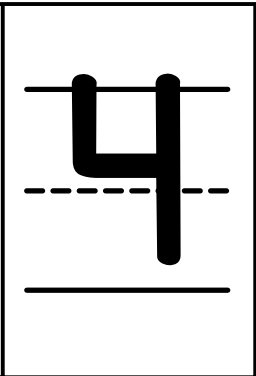
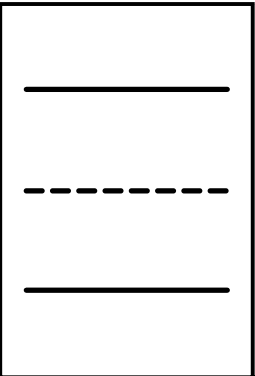

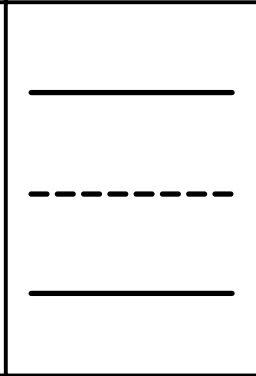

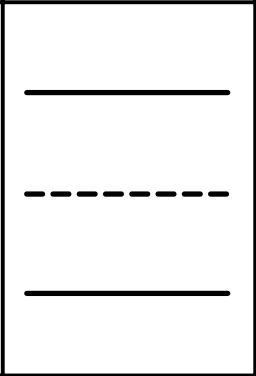
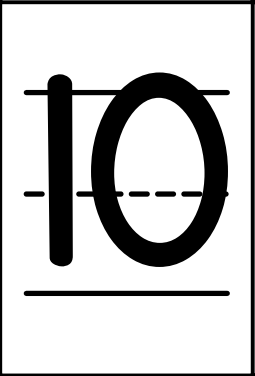
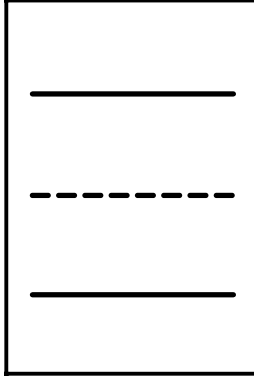
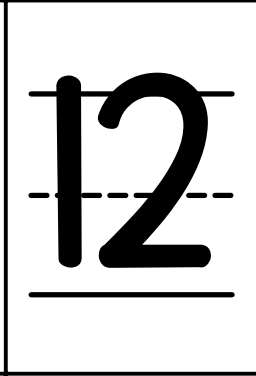
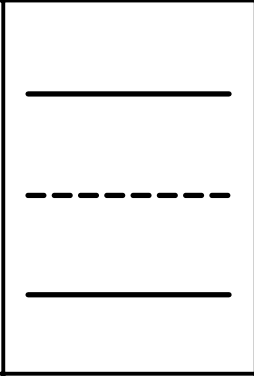
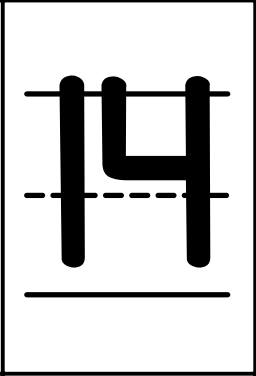
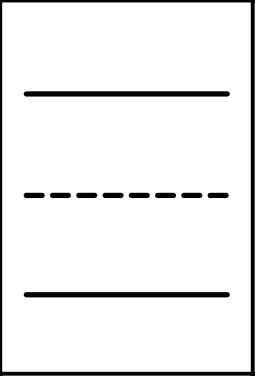

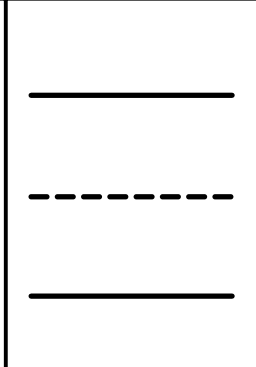

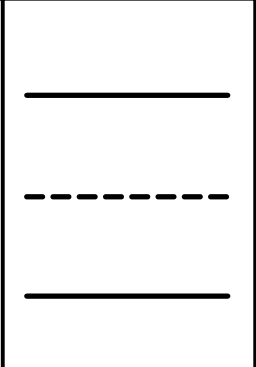

1		3		5
	7		9	
11		13		15
	17		19	

Name _____

Date _____

Writing Numbers

Write the missing numbers.

Name _____ Date _____

Writing Numbers

Write the numbers 1 to 20 in order.

<hr/> <hr/> <hr/>	<hr/> <hr/> <hr/>	<hr/> <hr/> <hr/>	<hr/> <hr/> <hr/>	<hr/> <hr/> <hr/>
<hr/> <hr/> <hr/>	<hr/> <hr/> <hr/>	<hr/> <hr/> <hr/>	<hr/> <hr/> <hr/>	<hr/> <hr/> <hr/>
<hr/> <hr/> <hr/>	<hr/> <hr/> <hr/>	<hr/> <hr/> <hr/>	<hr/> <hr/> <hr/>	<hr/> <hr/> <hr/>
<hr/> <hr/> <hr/>	<hr/> <hr/> <hr/>	<hr/> <hr/> <hr/>	<hr/> <hr/> <hr/>	<hr/> <hr/> <hr/>

Name _____

Date _____

NUMBER ORDER

Fill in the missing number in the sequence.

	2	3		
--	---	---	--	--

		8		10
--	--	---	--	----

11			14	
----	--	--	----	--

16			19	
----	--	--	----	--

Name _____

Date _____

NUMBER ORDER

Fill in the missing number in the sequence.

			4	5
--	--	--	---	---

6		8		
---	--	---	--	--

	12	13		
--	----	----	--	--

			19	20
--	--	--	----	----

Name _____

Date _____

NUMBER ORDER

Fill in the missing number in the sequence.

1			4	
---	--	--	---	--

	7	8		
--	---	---	--	--

	12		14	
--	----	--	----	--

16				20
----	--	--	--	----

Name _____

Date _____

NUMBER ORDER

Fill in the missing number in the sequence.

1				5
---	--	--	--	---

6				10
---	--	--	--	----

11				15
----	--	--	--	----

16				20
----	--	--	--	----

Name _____

Date _____

NUMBER ORDER

Fill in the missing number in the sequence.

1			4	
---	--	--	---	--

6			9	
---	--	--	---	--

	12			15
--	----	--	--	----

		18		20
--	--	----	--	----

Name: _____

Counting 1 to 20

Fill in the missing numbers.

1		3	4	
---	--	---	---	--

	7			10
--	---	--	--	----

11		13	14	
----	--	----	----	--

	17		19	20
--	----	--	----	----